

FINAL ANSWER KEY

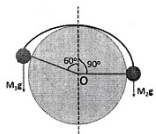
Question Paper Code:	61/2022/OL
Category Code:	267/2021
Exam:	Non Vocational Teacher in Physics (Senior)
Date of Test	07-08-2022
Department	Kerala Vocational Higher Secondary Education
Alphacode	A

Question1:-In the case of a simple pendulum with a rigid support, the constraint is

- A:-holonomic only
- B:-rhenomic only
- C:-both rhenomic and holonomic
- D:-both scleronomic and holonomic

Correct Answer:- Option-D

Question2:-Two particles of masses M_1 and M_2 are connected by a light inextensible string and hang over a fixed circular cylinder of radius 5 cm, the axis of which is horizontal. If the system is in equilibrium and $M_1 = 200\text{g}$, what will be the value of M_2 ?



- A:-108 g
- B:-151 g
- C:-173 g
- D:-230 g

Correct Answer:- Option-C

Question3:-Consider a frame S' which is rotating with an angular velocity $\vec{\omega} = (3t+4)\hat{i} + t^2\hat{j} - 5t\hat{k}$ with respect to a fixed frame S having same origin. The position vector of a particle at any instant as observed in S' frame is $\vec{r} = t^2\hat{i} + 6t\hat{j} + (4 + t^3)\hat{k}$. The Coriolis acceleration at time $t = 1$ is

- A:- $2\hat{i} + 6\hat{j} + 7\hat{k}$
- B:- $9\hat{i} + 7\hat{j} + 2\hat{k}$
- C:- $26\hat{i} + 49\hat{j} - 44\hat{k}$
- D:- $74\hat{i} - 118\hat{j} + 80\hat{k}$

Correct Answer:-Question Cancelled

Question4:-If R_e and R_m respectively represents the orbital radii of Earth and Mars, the ratio of orbital velocity of Mars to that of Earth around the Sun is

- A:- $\sqrt{R_m} : \sqrt{R_e}$
- B:- $\sqrt[3]{R_m} : \sqrt[3]{R_e}$
- C:- $\sqrt{R_e} : \sqrt{R_m}$
- D:- $\sqrt[3]{R_e} : \sqrt[3]{R_m}$

Correct Answer:- Option-C

Question5:-The angular speed of a partical moving under the action of a central force varies

- A:-inversely as the distance from the the origin to the particle
- B:-inversely as the square of the distance from the origin to the particle
- C:-directly as the distance from the origin to the particle
- D:-directly as the square of the distance from the origin to the particle

Correct Answer:- Option-B

Question6:-The eigen values of a system with Hamiltonian $\hat{H} = \epsilon \hat{\sigma} \cdot \hat{n}$, where ϵ is a constant having dimensions of energy, \hat{n} is an arbitrary unit vector and σ_x , σ_y and σ_z are Pauli matrices, are _____

- A:- $E_1 = \epsilon$ and $E_2 = \epsilon$
- B:- $E_1 = \epsilon$ and $E_2 = -\epsilon$
- C:- $E_1 = 2\epsilon$ and $E_2 = -\epsilon$

$D: E_1 = \epsilon$ and $E_2 = -2\epsilon$

Correct Answer:- Option-B

Question7:-For any given vector \vec{A} , $[\vec{\sigma}, \vec{A} \cdot \vec{\sigma}]$

A: $-2i(\sigma_x^2 - \sigma_y^2 + \sigma_z^2)$

B: $-2i(A_x^2 - A_y^2 + A_z^2)$

C: $-2i\vec{A} \times \vec{\sigma}$

D: $-2i\vec{A} \times \vec{\sigma}$

Correct Answer:- Option-C

Question8:-Which among the following statements are correct?

- (i) The eigen values of a Hermitian operator are real
- (ii) Eigenfunctions belonging to distinct eigenvalues of a Hermitian operator are orthogonal
- (iii) The set of all eigenvectors of a bounded Hermitian operator forms a complete set
- (iv) All Hermitian operators represent observables

A:-Only (i) and (ii) are correct

B:-Only (i), (ii) and (iii) are correct

C:-Only (i), (ii) and (iv) are correct

D:-All statements are correct

Correct Answer:- Option-B

Question9:-Which one of the following represents the matrix for J_x for $j = \frac{3}{2}$?

A: $\frac{\hbar}{2} \begin{bmatrix} 3 & 0 & 0 & 0 \\ 0 & 1 & 0 & 0 \\ 0 & 0 & -1 & 0 \\ 0 & 0 & 0 & -3 \end{bmatrix}$

B: $\frac{\hbar}{2} \begin{bmatrix} 0 & \sqrt{3} & 0 & 0 \\ 0 & 0 & 2 & 0 \\ 0 & 0 & 0 & \sqrt{3} \\ 0 & 0 & 0 & 0 \end{bmatrix}$

C: $\frac{\hbar}{2} \begin{bmatrix} 0 & \sqrt{3} & 0 & 0 \\ \sqrt{3} & 0 & 0 & 0 \\ 0 & 2 & 0 & \sqrt{3} \\ 0 & 0 & -\sqrt{3} & 0 \end{bmatrix}$

D: $\frac{\hbar}{2} \begin{bmatrix} 0 & \sqrt{3} & 0 & 0 \\ \sqrt{3} & 0 & 0 & 0 \\ 0 & -2 & 0 & \sqrt{3} \\ 0 & 0 & -\sqrt{3} & 0 \end{bmatrix}$

Correct Answer:-Question Cancelled

Question10:-Which among the following statements on Klein-Gordon equation are correct?

- (i) It has nothing to say about the spin of the particle
- (ii) It can give negative energy solutions
- (iii) It describes a system of arbitrary number of particles and their antiparticle by treating ψ as an operator function

A:-Statements (i) and (ii) are correct

B:-Statements (i) and (iii) are correct

C:-Statements (ii) and (iii) are correct

D:-All the statements are correct

Correct Answer:- Option-A

Question11:-Assume that an atomic electron with orbital angular momentum quantum number $l=3$ is placed in a magnetic field of 3T is applied along in the z-direction. The separation between the energy levels is _____ (Take bohr magneton = 10^{-23} SI units)

A: $-1.0 \times 10^{-23} J$

B: $-1.5 \times 10^{-23} J$

C: $-3.0 \times 10^{-23} J$

D: $-6.0 \times 10^{-23} J$

Correct Answer:- Option-C

Question12:-The operational amplifier 741C has a slew rate of 15 V/ μ s. What is the power bandwidth for a peak output voltage of 200 mV

- A:-240 kHz
- B:-3 MHz
- C:-12MHz
- D:-26 MHz

Correct Answer:- Option-C

Question13:-In a gallium arsenide LED, _____ of the photons incident from the GaAs on the GaAs-air interface are reflected back in to the semiconductor. Refractive index of GaAs (at a wavelength 700 nm)= 3.50

- A:-6%
- B:-15%
- C:-31%
- D:-48%

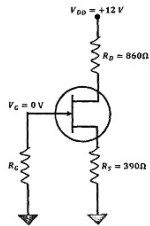
Correct Answer:-Question Cancelled

Question14:-The rate of change of output voltage of an op-amp integrator, in response to a step input is set by

- A:-RC time constant
- B:-the current through the capacitor
- C:-the amplitude of the step output
- D:-all the above

Correct Answer:- Option-D

Question15:-For the given n-channel JFET circuit, $I_D = 8mA$. What are the values of V_{DS} and V_{GS}



- A:- $V_{DS} = 5.12V; V_{GS} = 3.00V$
- B:- $V_{DS} = 2.00V; V_{GS} = 3.12V$
- C:- $V_{DS} = 3.12V; V_{GS} = 2.00V$
- D:- $V_{DS} = 3.12V; V_{GS} = 5.12V$

Correct Answer:- Option-B

Question16:-The antenna current of an AM transmitter is 10 A when only the carrier is sent. If the transmitter current increases to 10.87 A on modulation with a single sine wave, what will be the percentage modulation?

- A:-13%
- B:-36%
- C:-60%
- D:-87%

Correct Answer:- Option-C

Question17:-An amplifier with resistive negative feedback has two left half plane poles in its open loop transfer function. The amplifier

- A:-will be stable for all frequencies
- B:-may be unstable depending on the feedback factor
- C:-will always be unstable at high frequencies
- D:-will oscillate at low frequencies

Correct Answer:- Option-A

Question18:-Which of the following is not true for Hermite polynomials?

- (i) $H_n(-x) = (-1)^n H_n(x)$
- (ii) $H'_n(x) = 2nH_{n-1}(x)$
- (iii) $H_{n+1}(x) = 2xH_n(x) + 2nH_{n-1}(x)$

- A:-Only statement (i)
- B:-Only statement (ii)
- C:-Only Statement (iii)

D:-None of the statement is wrong

Correct Answer:- Option-C

Question19:-The series $\sum_{n=2}^{\infty} \frac{\cos n \Pi}{\sqrt{n}}$ is _____

A:-Convergent

B:-Divergent

C:-A positive term series

D:-None of these

Correct Answer:- Option-A

Question20:-The value of the integral $I = \int_C \frac{5-2z}{z(z-1)(z-3)} dz$, where $z = x + iy$ and C is the circle $|z| = \frac{5}{2}$ is _____

A:- $\frac{\pi}{3} i$

B:- $\frac{2\pi}{3} i$

C:- πi

D:- $2\pi i$

Correct Answer:- Option-A

Question21:-Given $v(x,y)=6xy-5x+3$

If $z = x + iy$, which one of the following can represents the analytic function $f(z)=u(x,y)+iv(x,y)?x^{m+n}$

A:- $4z^2 - 5iz + 3i + C$

B:- $5z^2 - 5iz + 8i + C$

C:- $z^2 - 4iz + 3i + C$

D:- $3z^2 - 5iz + 3i + C$

Correct Answer:-Question Cancelled

Question22:-If p is a positive integer, which one of the following represents Bessel function of the first kind of order p?

A:- $J_p(x) = \sum_{n=0}^{\infty} \frac{(-1)^n}{n!(n+p)!} \left(\frac{x}{2}\right)^{n+p}$

B:- $J_p(x) = \sum_{n=0}^{\infty} \frac{(-1)^n}{n!(n+p)!} \left(\frac{x}{2}\right)^{2n+p}$

C:- $J_p(x) = \sum_{n=0}^{\infty} \frac{(-1)^{2n}}{n!(n+p)!} \left(\frac{x}{2}\right)^{2n+p}$

D:- $J_p(x) = \sum_{n=0}^{\infty} \frac{(-1)^{2n}}{n!(n+p)!} \left(\frac{x}{2}\right)^{2n+p}$

Correct Answer:- Option-B

Question23:-How many hardware interrupts are available in an 8085 microprocessor?

A:-2

B:-3

C:-4

D:-5

Correct Answer:- Option-D

Question24:-What is the use of HOLD signal in an 8085-microprocessor based system?

A:-It is used for direct memory access data transfer

B:-It is used by slow peripherals to get extra time in order to communicate with the processor

C:-It is used to select between address and data coming through a multiplexed address/data bus

D:-none of the above

Correct Answer:- Option-A

Question25:-During a memory read cycle in 8085 μP , WAIT states, if required, are introduced between

A:-1st and 2nd T-states

B:-2nd and 3rd T-states

C:-Any time after 1st T-state

D:-WAIT states cannot be added in a memory read cycle

Correct Answer:- Option-B

Question26:-The _____ data transfer scheme in a microprocessor system is devoid of handshaking signals.

A:-Synchronous

B:-Asynchronous

C:-Direct memory access

D:-None of these

Correct Answer:- Option-A

Question27:-The memory locations 8000 H and 8001 H contains hexadecimal numbers 06 H and 04 H respectively. The content of 8000 H after the execution of the following program is

```
LXI H, 8001
LDA 8000
MOV B, M
DCX H
SUB B
MOV M, L
STA 8002
HLT
```

A:-06 H

B:-04 H

C:-02 H

D:-00H

Correct Answer:- Option-D

Question28:-Which of the following statement is not correct for 8085 microprocessors?

A:-It is an 8-bit processor

B:-Its general purpose registers cannot be used in pairs

C:-It has dedicated pins for serial data transmission

D:-It can address up to 64k memory locations

Correct Answer:- Option-B

Question29:-The temperature of a monoatomic ideal gas is raised by 20%, What is the change in entropy of one mole of the gas, if the rise in temperature occurs at constant pressure?

A:- $28.70 \log_{10} (1.2) JK^{-1} mol^{-1}$

B:- $47.87 \log_{10} (1.2) JK^{-1} mol^{-1}$

C:- $28.70 \log_{10} (0.83) JK^{-1} mol^{-1}$

D:- $47.87 \log_{10} (0.83) JK^{-1} mol^{-1}$

Correct Answer:- Option-B

Question30:-Which of the following statement(s) is/are correct consequence of Liouville's theorem?

- (i) If a given number of representative points occupy an element of volume δV at a certain time, they will another volume of equal size at a later time
- (ii) The distribution of representative points moves in the Γ - space like a compressible fluid

A:-Statement (i) only

B:-Statement (ii) only

C:-Both are correct

D:-None are correct

Correct Answer:- Question Cancelled

Question31:-The condensation temperature of an ideal Bose gas is 10 K. The specific heat of the gas at temperature 2.5 K is

A:- $0.5 JK^{-1} mol^{-1}$

B:- $2 JK^{-1} mol^{-1}$

C:- $8 JK^{-1} mol^{-1}$

D:- $16 JK^{-1} mol^{-1}$

Correct Answer:- Option-B

Question32:-Which of the following statement is/are correct about Landau diamagnetism?

- (i) It arises from the quantization of the orbits of charged particles in a Fermi gas, in the presence of an external magnetic field

- (ii) The susceptibility at high temperature varies as $\chi \propto T^{-1/2}$
 (iii) As $T \rightarrow 0$, the susceptibility is independent of temperature

- A:-(i) and (ii) are correct
 B:-(i) and (iii) are correct
 C:-(ii) and (iii) are correct
 D:-All the statements are correct

Correct Answer:- Option-B

Question33:-For an ideal Bose gas at T_c , the deviation in energy from the corresponding classical value is about _____

- A:-25%
 B:-33%
 C:-50%
 D:-67%

Correct Answer:- Option-C

Question34:-The pressure exerted at absolute zero by the electrons in a hypothetical metal having three conduction electrons is _____

Given, Density of the metal = $0.9 \times 10^3 \text{ kgm}^{-3}$,
 Atomic weight of the metal = $1.8 \times 10^7 \text{ kg(kmol)}^{-1}$.

Avagardo number = $6 \times 10^{26} \text{ atoms(kmol)}^{-1}$, $h = 6 \times 10^{-34} \text{ Js}$ and mass of electron = $9 \times 10^{-31} \text{ kg}$

A:- $\left(\frac{81}{5\pi^{2/3}}\right) \times 10^5 \text{ Nm}^{-2}$

B:- $\left(\frac{81}{5\pi^{2/3}}\right) \times 10^8 \text{ Nm}^{-2}$

C:- $\left(\frac{81}{5\pi^{2/3}}\right) \times 10^{11} \text{ Nm}^{-2}$

D:- $\left(\frac{81}{5\pi^{2/3}}\right) \times 10^{12} \text{ Nm}^{-2}$

Correct Answer:-Question Cancelled

Question35:-The Lagrangian of a particle is given by $L = \dot{y}^2 + Aw^2y^2 - Cy^3$ where A, B and C are constants. The corresponding Hamiltonian is _____

A:- $H = \frac{p^2 - y}{4(1 - By)} - Aw^2y^2 - Cy^3$

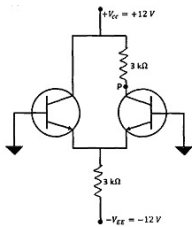
B:- $H = \frac{p^2 - y}{8(1 - By)} - Aw^2y^2 - Cy^3$

C:- $H = \frac{py}{2(1 - By)} - Aw^2y^2 - Cy^3$

D:- $H = \frac{py}{8(1 - By)} - Aw^2y^2 - Cy^3$

Correct Answer:-Question Cancelled

Question36:-The tail current I_T , emitter current I_E and dc voltage at the point P (V_c) for the following circuit based on silicon transistor, using second approximation are



- A:- $I_T = 4.0 \text{ mA}$, $I_E = 2.0 \text{ mA}$ and $V_c = 6.0 \text{ V}$
 B:- $I_T = 2.0 \text{ mA}$, $I_E = 4.0 \text{ mA}$ and $V_c = 6.0 \text{ V}$
 C:- $I_T = 1.88 \text{ mA}$, $I_E = 3.77 \text{ mA}$ and $V_c = 0.69 \text{ V}$
 D:- $I_T = 3.77 \text{ mA}$, $I_E = 1.88 \text{ mA}$ and $V_c = 6.36 \text{ V}$

Correct Answer:- Option-D

Question37:- $\int_0^1 (x^2 - 5x + 2) \Delta [2(x-4)] dx =$

- A:-2
- B:-1
- C:-0
- D:-2

Correct Answer:- Option-B

Question38:-The phase velocity of ocean waves is, $\sqrt{g \lambda / 2\pi}$ where g is the acceleration due to gravity. The group velocity of ocean waves is

- A:- $\sqrt{g \lambda / 8\pi}$
- B:- $\sqrt{g \lambda / 4\pi}$
- C:- $\sqrt{g \lambda / \pi}$
- D:- $\sqrt{2g \lambda / \pi}$

Correct Answer:- Option-A

Question39:-The probability that an N-particle system in contact with a heat reservoir has energy E is proportion is proportional to

- A:- $\exp\left(-\frac{E}{kT}\right)$
- B:- $E^{2N} \exp\left(-\frac{E}{kT}\right)$
- C:- $E^{\frac{N}{2}} \exp\left(-\frac{E}{kT}\right)$
- D:- $E^{\left(\frac{3N}{2} - 1\right)} \exp\left(-\frac{E}{kT}\right)$

Correct Answer:- Option-A

Question40:-For a 16-bit analog-to-digital converter calibrated for a 0 to 5V range, the analog voltages corresponding to LSB and MSB are respectively _____ and _____

- A:-76.3 mV, 5.0 V
- B:-76.3 mV, 4.92 V
- C:-76.3 μ V, 4.92 V
- D:-76.3 μ V, 2.50 V

Correct Answer:- Option-D

Question41:-The configuration of a known dynamical system is described by generalized coordinate q and its sbehaviour by the hamiltonian function $H(q,p,t) = \alpha p^2 + \beta p(q+t)^2$, where α and β are constants. If a point transformation is made to a new generalized coordinate $Q = q+t$, the corresponding Hamiltonian $K(Q,P,t)$ is _____

- A:- $K = \alpha P^2 + \beta P Q^2$
- B:- $K = \alpha P^2 + (\beta P + 1)$
- C:- $K = \alpha P^2 + P(\beta Q^2 + 1)$
- D:- $K = P^2 + (\alpha + \beta Q) + P$

Correct Answer:- Option-C

Question42:- $\int_1^0 x^{n-1} \left\{ \ln\left(\frac{1}{x}\right) \right\}^{m-1} dx =$

- A:- $\frac{1}{n^m} (m-1)$
- B:- $\frac{1}{n^{m-1}} (m-1)$
- C:- $\frac{1}{n^{m-1}} (m)$
- D:- $\frac{1}{n^m} (m)$

Correct Answer:- Question Cancelled

Question43:-Nuclear force is

- A:-Charge dependent
- B:-Spin dependent

C:-Spin independent

D:-None of the above

Correct Answer:- Option-B

Question44:-For a prolate charge distribution of the nucleus, electric quadrupole moment is

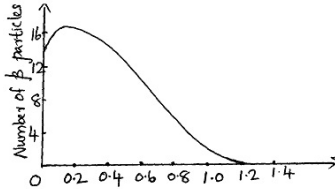
A:-Positive

B:-Negative

C:-Zero

D:-Both (1) and (2)

Correct Answer:- Option-A



Question45:-

Energy of the β particles in MeV.

The above figure shows the β -ray spectrum of Bi-210. The disintegration energy of the reaction is 1.16 MeV. If the kinetic energy of the β -particle is 0.76 MeV, calculate the energy of the associated neutrino in Mev.

A:-0.76 MeV

B:-1.16 Mev

C:-Zero

D:-0.4 MeV

Correct Answer:- Option-D

Question46:-The conservation of parity is valed only for

A:-strong interactions

B:-electromagnetic interactions

C:-Both (1) and (2)

D:-weak interactions

Correct Answer:- Option-C

Question47:-The charge of ddu quark is

A:-e

B:-zero

C:-+e

D:-+2e

Correct Answer:- Option-B

Question48:-In the reaction $\Pi^+ + n \rightarrow \Lambda^0 + X$, what is X?

A:- K^+

B:-P

C:- Σ^+

D:- K^-

Correct Answer:- Option-A

Question49:-X-ray crystallography is not used to find the physical properties of which of the following

A:-Crystals

B:-Metals

C:-Solid

D:-Liquid

Correct Answer:- Option-D

Question50:-If a primitive cell in the direct lattice has a volume V, then the primitive cell of the reciprocal lattice has a volume

A:- $\frac{(2\pi)^3}{V}$

B: V^3

C: $\left(\frac{2\pi^3}{V}\right)$

D: $\frac{V^3}{2\pi}$

Correct Answer:- Option-A

Question51:-In a periodic potential lattice, the electron energy values are

A:-continuous

B:-discontinuous

C:-quasi continuous

D:-none of the above

Correct Answer:- Option-B

Question52:-According to Einstein's theory of specific heat, at lower temperatures the specific heat

A:-Remains constant

B:-Drops linearly with decrease of temperature

C:-Drops linearly with increase to temperature

D:-Drops exponentially with decrease of temperature

Correct Answer:- Option-D

Question53:-In piezoelectric materials, electricity is produced by applying

A:-Temperature

B:-Pressure

C:-Magnetic field

D:-Electric field

Correct Answer:- Option-B

Question54:-The temperature at which an antiferromagnetic substance becomes a paramagnetic substance

A:-curie temperature

B:-transition temperature

C:-Faraday's temperature

D:-Neel temperature

Correct Answer:- Option-D

Question55:-The critical field strength of a superconducting material is zero at

A:-Transition temperature

B:-OK

C:-Room temperature

D:-none of these

Correct Answer:- Option-A

Question56:-The maximum distance upto which the electron pairs are correlated to produce superconductivity is called

A:-Penetration depth

B:-Skin depth

C:-Coherence length

D:-Range

Correct Answer:- Option-C

Question57:-In the rotation spectrum of a non-rigid rotator, the rotational constant is related to the centrifugal distortion constant by the relation

A:- $B = \frac{4D^3}{W^2}$

B:- $D = \frac{4B^3}{W^2}$

C:- $B = \frac{W^2}{4D^3}$

D:- $D = \frac{W^2}{4B^3}$

Correct Answer:- Option-B

Question58:-A linear molecule has _____ normal modes of vibrations

A:- $3n-3$

B:- $3n-4$

C:- $3n-5$

D:- $3n-6$

Correct Answer:- Option-C

Question59:-In the rotational Raman spectrum of O_2 , the spacing between two successive spectral lines is

A:- $8B$

B:- $6B$

C:- $4B$

D:- $2B$

Correct Answer:- Option-A

Question60:-The band transitions represented by (0,0), (0,1), (0,2), (0,3)....in the electronic spectra of diatomic molecules are called

A:- J' progression

B:- J'' progressions

C:- V' progressions

D:- V'' progressions

Correct Answer:- Option-D

Question61:-If a nucleus has mass number A is even and atomic number Z is odd, then that nucleus has a spin

A:-Zero

B:-Integer

C:-Half integer

D:-None of these

Correct Answer:- Option-B

Question62:-An NMR signal for a compound is found to be 200 Hz downward from TMS peak using a spectrometer operating at 50 MHz. What is its chemical shift in ppm

A:-2 ppm

B:-10 ppm

C:-5 ppm

D:-4 ppm

Correct Answer:- Option-D

Question63:-In Mössbauer spectroscopy, the emitting and absorbing nuclei are bound in crystal lattice in order to reduce

A:-Absorption frequency

B:-Emission frequency

C:-Recoil energy

D:- None of these

Correct Answer:- Option-C

Question64:-Which of the following is a characteristic of stimulated emission

A:-Multiplication of photons

B:-It is controllable from outside

C:-Photon produced propagates in the same direction of stimulating photon

D:-All of the above

Correct Answer:- Option-D

Question65:-In passive Q-switching of lasers, which of the following is used as the attenuator

A:-Shutter

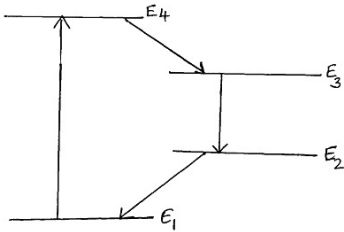
B:-Semiconductor

C:-Spinning prism

D:-Chopper wheel

Correct Answer:- Option-B

Question66:-The following figure shows a four level laser pumping scheme



in this which energy level is meta stable state

A:- E_1

B:- E_2

C:- E_3

D:- E_4

Correct Answer:- Option-C

Question67:-Carbon dioxide laser is a

A:-Four level laser

B:-Three level laser

C:-Two level laser

D:-None of these

Correct Answer:- Option-A

Question68:-When image is reconstructed in holography, which image is formed at the location formerly occupied by the object

A:-Virtual image

B:-Real image

C:-Both (1) and (2)

D:-None of these

Correct Answer:- Option-A

Question69:-The numerical aperture of an optical fibre depends on

A:-Refractive index of the core

B:-Refractive index of the cladding

C:-Both (1) and (2)

D:-Incident light

Correct Answer:- Option-C

Question70:-Which of the following is an advantages of optical fibre communication

A:-Economical and cost-effective

B:-Thin and non-flammable

C:-Less power consumption

D:-All of the above

Correct Answer:- Option-D

Question71:-"The colour of that light is blue". This learner response is a product of

A:-Sensation

B:-Perception

C:-Analysis

D:-Evaluation

Correct Answer:- Option-B

Question72:-The measurement of intellectual and skillful products are done using

A:-Ability assessment

B:-Collective Assessment

C:-Authentic Assessment

D:-Authoritative Assessment

Correct Answer:- Option-C

Question73:-In a student initiated classroom, students

- A:-listen the teacher explanations of topic
- B:-attend class test and remedial teaching
- C:-enrich knowledge through online learning
- D:-participate in all decision making processes

Correct Answer:- Option-D

Question74:-Intelligence is a combination of many traits and capacities. This multiple intelligence theory was proposed by

- A:-Gardner
- B:-Thurston
- C:-Binet
- D:-Spearman

Correct Answer:- Option-A

Question75:-The learner should construct knowledge through proper social interactions. This theory is a premise of

- A:-Cognitive constructivism
- B:-Social constructivism
- C:-Collaborative constructivism
- D:-Constructive Socialism

Correct Answer:- Option-B

Question76:-The researcher implements an action plan to solve the problem of particular context. This research is known as

- A:-Case study
- B:-Experimental research
- C:-Action research
- D:-Evaluation study

Correct Answer:- Option-C

Question77:-A research topic is entitled as 'A study on the lifestyle practices of teachers'. The most appropriate method to study this research is

- A:-Survey method
- B:-Experimental method
- C:-Historical method
- D:-Document analysis

Correct Answer:- Option-A

Question78:-The UGC aided agency for organizing teacher training for in service teachers of Higher Education level

- A:-National Council for Educational Research and Training
- B:-State Institute for Educational Technology
- C:-Adult and Continuing Education Centre
- D:-Human Resource Development Centre

Correct Answer:- Option-D

Question79:-'There is no relationship between intelligence and home environment' This hypothesis is known as

- A:-Directional Hypothesis
- B:-Alternative Hypothesis
- C:-Null Hypothesis
- D:-Insignificant hypothesis

Correct Answer:- Option-C

Question80:-Copying the works of others and claiming as own work is known as

- A:-Plagiarism
- B:-Pragmatism
- C:-Pluralism
- D:-Pugilism

Correct Answer:- Option-A

Question81:-Which are the non-justiciable rights of Indian citizens?

- (i) Art.41, 43, 45, 39A
- (ii) Art.48, 45, 41, 39

- (iii) Art.39 d, 39c, 47, 50
- (iv) Art.45, 43, 39F, 41

- A:-(i) only
- B:-(i) and (ii)
- C:-(i) and (iv)
- D:-(ii) and (iii)

Correct Answer:- Option-C

Question82:-"The preamble of the constitution of India serves two purposes" - Identify them

- (i) Indicates the sources from which the constitution derives its authority.
- (ii) Ideals of the resolutions are faithfully embodied
- (iii) It states the objects which the Constitution seeks to establish and promote.
- (iv) Protect the ultimate sovereignty of the people of India

- A:-(i) and (ii)
- B:-(iii) and (iv)
- C:-(ii) and (iv)
- D:-(i) and (iii)

Correct Answer:- Option-D

Question83:-Few names of the Chief Election Commissioners of India are given. Which among the following is in correct chronology?

- (i) Sukumar Sen, KVK Sundaram, SP Sen Verma
- (ii) Sukumar Sen, M.S. Gill, Nagendra Singh
- (iii) Sukumar Sen, M.S. Gill, SP Sen Verma
- (iv) Sp sen Varma, KVK Sundaram, T.N. Seshan

- A:-(i) only
- B:-(ii) and (iii)
- C:-(i) and (iv)
- D:-(i) and (iii)

Correct Answer:- Option-A

Question84:-With reference to the NEP 2020, consider the following statements

- (i) Increase the gross enrollment ratio in Higher Education to 50% by 2030
 - (ii) Start Higher Education commission including medical and legal education.
 - (iii) Set up an Indian Institute of Translation and Interpretation. (ITI)
 - (iv) Ek Bharath Shreshtha Bharath initiative will be started
- Which of the above statements is/are correct?

- A:-(i) only
- B:-(iii) only
- C:-(i) and (ii) only
- D:-(iii) and (iv)

Correct Answer:- Option-B

Question85:-Trace the true features related to the state of Andhra Pradesh

- (i) It is the Eighth largest state in India
- (ii) Occupies the third largest coast line
- (iii) Andhra Pradesh bifurcated in the year 2015
- (iv) The state celebrates Ugadi as festival

- A:-(i) and (iv)
- B:-(i) and (iii)
- C:-(i), (ii) and (iv)
- D:-(i), (ii) and (iii)

Correct Answer:- Option-A

Question86:-Which of the following statements is not true in the context of MP LADS?

- (i) Funds are released in the form of grants in aid directly to the State Government
- (ii) Elected Loksabha members can recommend works in their respective constituencies
- (iii) 15 percent of MPLADS funds are to be utilised for areas inhabited by ST population.
- (iv) Nominated members can utilise fund anywhere in the country

- A:-(i) and (ii)
- B:-(iii) and (iv)
- C:-(i) and (iii)
- D:-(i) and (iv)

Correct Answer:- Option-C

Question87:-Which among the following statements are false related to Pradhanamantri Mudra Yohana?

- (i) Launched in the year 2016
- (ii) Launched three innovative projects Shishu, Kishore and Tarun
- (iii) Extending funding support to encourage entrepreneurship in India
- (iv) Extending no support to activities allied to agriculture

A:-(i), (ii) and (iii)

B:-(i), (ii) and (iv)

C:-(ii), (iii) and (iv)

D:-(i), (iii) and (iv)

Correct Answer:- Option-B

Question88:-Which of the following statements are true about the policy on Child Labour?

- (i) The National Policy on Child Labour was announced in 1987
- (ii) The Child Labour Prohibition and Regulation act came into force from 2017
- (iii) The National Child Labour Project Scheme was started in 1988
- (iv) The National Child Labour Project Societies are set up at state level

A:-(i) and (ii)

B:-(ii) and (iii)

C:-(i) and (iii)

D:-(ii) and (iv)

Correct Answer:- Option-C

Question89:-Locate the major interventions of RKSK

- (i) Weekly Iron Folic acid Supplementation
- (ii) Adolescent Family Health Clinics
- (iii) Promotion of Menstrual Hygiene among Adolescent Girls
- (iv) Peer Education programmes

A:-(i), (ii) and (iii)

B:-(ii), (iii) and (iv)

C:-(i), (ii) and (iv)

D:-(i), (iii) and (iv)

Correct Answer:- Option-D

Question90:-With reference to The National Overseas Scholarship for ST students, consider the following statements

- (i) The number of awards has been increased to 15
 - (ii) Number of subjects has been increased from 35 to 52
 - (iii) The maximum income ceiling has been increased to 8 lakhs per annum
 - (iv) 30 percent of the scholarships are reserved for Girls
- Which of the statements given above are correct?

A:-(ii) and (iv)

B:-(ii) and (iii)

C:-(i) and (iii)

D:-(i) and (ii)

Correct Answer:- Option-A

Question91:-The aim behind introduction of English Education by English East India Company

A:-Improve standard of living of people

B:-Intellectual and social development

C:-To supply the company with reliable and capable public servant

D:-Eradicate superstitions and evil practices

Correct Answer:- Option-C

Question92:-Who wrote the poem, 'About My Race : A Song'

A:-Kumaran Asan

B:-Kumara Guru

C:-Ullloor S. Parameshwara Iyer

D:-Dr. B.R. Ambedkar

Correct Answer:- Option-B

Question93:-Which agitation related to Women Rights in history of Kerala?

A:-Channar Revolt

B:-Kuttamkulam Struggle

C:-Abstention movement

D:-Malabar Riots

Correct Answer:- Option-A

Question94:-Which media group published the Malayalam literary magazine Bhashaposhini

A:-Kerala Kaumudi

B:-Rashtra Deepika Ltd

C:-The Mathrubhumi Printing and Publishing Company Ltd

D:-Malayala Manorama Company Ltd

Correct Answer:- Option-D

Question95:-Who contributed to revitalising the traditional Keralite dance

A:-Kodungallur Kunhikkuttan Thampuran

B:-Kerala Varma Valiyakoyi Thampuran

C:-Vallathol Narayana Menon

D:-Chandu Menon

Correct Answer:- Option-C

Question96:-Which country won Thomas Cup 2022

A:-India

B:-Indonesia

C:-China

D:-Denmark

Correct Answer:- Option-A

Question97:-Kalaripayattu included in

A:-Applied arts

B:-Performing arts

C:-Martial arts

D:-Fine arts

Correct Answer:- Option-C

Question98:-Government of India announce a series of events to celebrate 75th anniversary of India's independence. In which name of the series of events announced.

A:-Make in India

B:-Azadi Ka Amrit Mahotsav

C:-Amrut

D:-Start up India, stand up India

Correct Answer:- Option-B

Question99:-The World Economic Forum presented the concept of Global Collaboration Village at the annual meeting of 2022. What is the aim of Global Collaboration village?

A:-Social protection and economic stimulus packages serve women and girls

B:-To maintain international peace and security

C:-To promote human rights and fundamental freedom for the people of the world

D:-To create a new virtual space where global interaction can be enhanced and cooperative solutions found:

Correct Answer:- Option-D

Question100:-Who won the Final Indian Premier League (IPL) 2022?

A:-Rajasthan Royals

B:-Gujarat Titans

C:-Lucknow super giants

D:-Royal challengers Bangalore

Correct Answer:- Option-B